



1. Kademe (1, 2, 3 ve 4. Sınıf)  
Ders Kitabı



# Öğrenmeye Hazırlık

I. Kademe (1, 2, 3 ve 4. Sınıf)  
Ders Kitabı

## Görsel Algı

### 2. Kitap

#### YAZARLAR

Prof. Dr. Emine Rüya Özmen  
Öğr. Gör. Dr. Arzu Doğanay Bilgi  
Arş. Gör. Gökhan Açıkgöz  
Zehra Er



**Editör**

Prof. Dr. Emine Rya zmen

**Dil Uzmanı**

Afife Nurten Aytaç

**Grsel Tasarım ve Resimleme**

Zuhal Harputođulları

Sabri Akkerman



## İSTİKLÂL MARŞI

Korkma, sönmez bu şafaklarda yüzen al sancak;  
Sönmeden yurdumun üstünde tüten en son ocak.  
O benim milletimin yıldızıdır, parlayacak;  
O benimdir, o benim milletimindir ancak.

Çatma, kurban olayım, çehreni ey nazlı hilâl!  
Kahraman ırkıma bir gül! Ne bu şiddet, bu celâl?  
Sana olmaz dökülen kanlarımız sonra helâl.  
Hakkıdır Hakk'a tapan milletimin istiklâl.

**Mehmet Âkif ERSOY**

ANDIMIZ

Türküm, doğruyum, çalışkanım.

İlkem küçüklerimi korumak, büyüklerimi saymak; yurdumu, milletimi özümde çok sevmektir.


Ülküm yükselmek, ileri gitmektir.

Ey Büyük Atatürk!

Açtığın yolda, gösterdiğin hedefe durmadan yürüyeceğime ant içerim.

Varlığım Türk varlığına armağan olsun.

Ne mutlu Türküm diyene!



**MUSTAFA KEMAL ATATÜRK**



## İÇİNDEKİLER

Kitabımızı tanıyalım .....	7
Ayrıntısı aynı olanları bulalım.....	8
Eksik ayrıntısı aynı olanları bulalım.....	16
Aynı yönde olanları bulalım.....	24
Resimlerin gölgelerini bulalım.....	40
Resimlerin gölgelerini eşleyelim.....	48
Farklı olanı bulalım.....	56
Farklı renkte olanları bulalım.....	65
Farklı büyüklükte olanı bulalım.....	74
Farklı olan şekli bulalım.....	83
Farklı renkte olan şekli bulalım.....	89
Farklı büyüklükte olan şekli bulalım.....	95
Farklı yönde olanı bulalım.....	101
Ayrıntısı farklı olanı bulalım.....	107
Ayrıntısı eksik olanı bulalım.....	113
Ayrıntısı farklı yönde olanı bulalım.....	119
Farklı yönde olan şekli bulalım.....	125
Ayrıntısı farklı olan şekli bulalım.....	127
Ayrıntısı eksik olan şekli bulalım.....	129
Ayrıntısı farklı yönde olan şekli bulalım.....	131
Kaynakça.....	133

## KİTABIMIZI TANIYALIM




Görsel algı, görsel uyarılar yoluyla bilgi edinme ve bu bilginin yorumlanması olarak tanımlanmaktadır. Görsel algı öğrenmenin en önemli temel unsurlarından biridir. Öğretim programında yer alan görsel algı bölümündeki hedef ve hedef davranışların kazandırılmasına yönelik dört ders kitabı hazırlanmıştır. Görsel algı ders kitapları genel olarak görsel eşleme, görsel ayırt etme, sınıflandırma, örüntü, görsel bellek, görsel hafıza gibi birçok alt beceriden oluşmaktadır. Görsel Algı kitaplarında hedef ve hedef davranışlar bir bütünlük içinde ele alınmıştır.

Öğrencileri görsel algı bakımından okumaya hazırlamak amacıyla düzenlenen bu kitapta öğrencilerin özellikle görsel eşleme ve görsel ayırt etme becerilerinin geliştirilmesi amaçlanmıştır. Kitapta görsel eşleme ile ilgili “nesne resimlerini ve yarı somut nesne resimlerini konum ve ayrıntılarına göre eşleme”, “nesneyi, resmi, şekli kendi gölgesi ile eşleme” hedeflerine ve hedef davranışlarına yönelik etkinlikler bulunmaktadır. Görsel ayırt etme ile ilgili olarak da aynı çeşitte/renkte/boyutta olan nesnelere arasından özellikleri farklı olan nesneyi gösterme, aynı nesne resimleri ve yarı soyut resimler arasından özellikleri farklı olan resimleri gösterme; aynı nesne resimleri ve yarı soyut resimler arasından konumları ve ayrıntıları farklı olan resimleri gösterme hedeflerine ve bu hedeflerin hedef davranışlarına yönelik çalışmalara yer verilmiştir.



Kitapta yer alan tüm çalışmalarda basitten zora doğru bir sıra izlenmiştir. Ayrıca kitapta her bir hedef davranış ile ilgili öğretim, değerlendirme ve alıştırmalar yer almaktadır.




Ayrıntısı aynı olanları bulalım.



a) Üstteki şekil ile aynı olanı göster.




b) Üstteki şekil ile aynı olanı göster.





Ayrıntısı aynı olanları bulalım.



c) Üstteki şekil ile aynı olanı göster.



ç) Üstteki şekil ile aynı olanı göster.








Ayrıntısı aynı olanları bulalım.




a) Üstteki şekil ile aynı olanı göster.




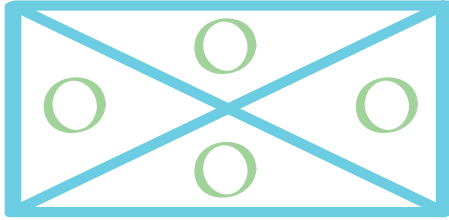
b) Üstteki şekil ile aynı olanı göster.



Ayrıntısı aynı olanları bulalım.



c) Üstteki şekil ile aynı olanı göster.

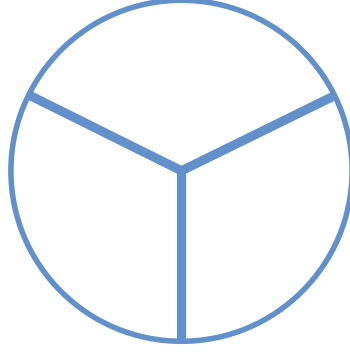


c) Üstteki şekil ile aynı olanı göster.




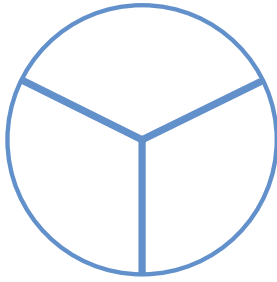







Ayrıntısı aynı olanları bulalım.




a) Üstteki şekil ile aynı olanı göster.





b) Üstteki şekil ile aynı olanı göster.





Ayrıntısı aynı olanları bulalım.



c) Üstteki şekil ile aynı olanı göster.



c) Üstteki şekil ile aynı olanı göster.







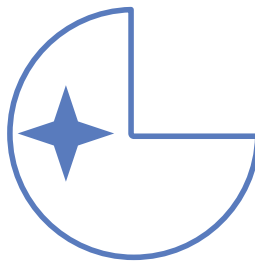

Ayrıntısı aynı olanları bulalım.




a) Üstteki şekil ile aynı olanı göster.



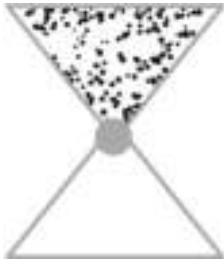
b) Üstteki şekil ile aynı olanı göster.



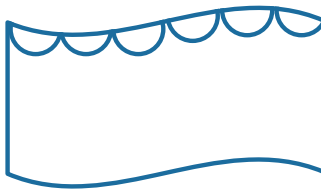
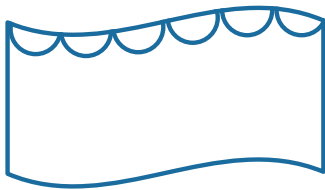
Ayrıntısı aynı olanları bulalım.



c) Üstteki şekil ile aynı olanı göster.



c) Üstteki şekil ile aynı olanı göster.






Eksik ayrıntısı aynı olanları bulalım.




a) Üstteki şekil ile aynı olanı göster.





b) Üstteki şekil ile aynı olanı göster.



Eksik ayrıntısı aynı olanları bulalım.



c) Üstteki şekil ile aynı olanı göster.




c) Üstteki şekil ile aynı olanı göster.









Eksik ayrıntısı aynı olanları bulalım.



a) Üstteki şekil ile aynı olanı göster.



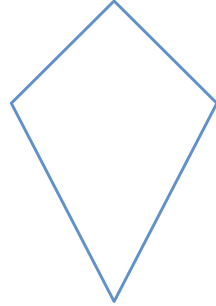
b) Üstteki şekil ile aynı olanı göster.



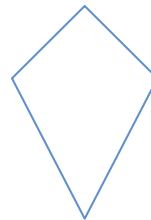
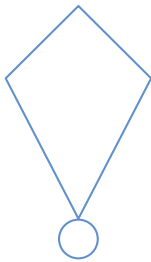
Eksik ayrıntısı aynı olanları bulalım.



c) Üstteki şekil ile aynı olanı göster.



c) Üstteki şekil ile aynı olanı göster.

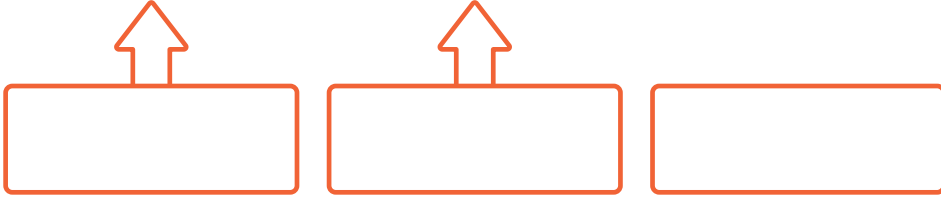




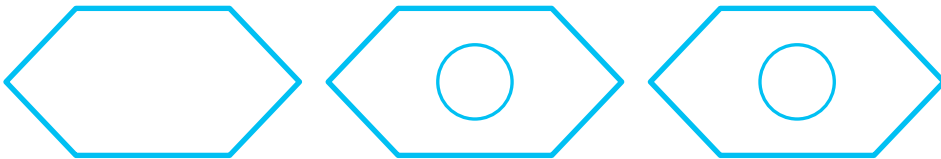
Eksik ayrıntısı aynı olanları bulalım.



a) Üstteki şekil ile aynı olanı göster.




b) Üstteki şekil ile aynı olanı göster.




Eksik ayrıntısı aynı olanları bulalım.



c) Üstteki şekil ile aynı olanı göster.

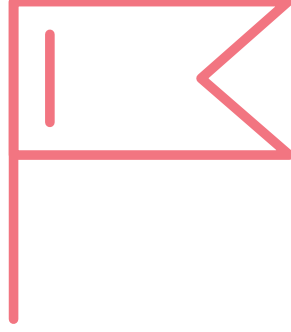


c) Üstteki şekil ile aynı olanı göster.


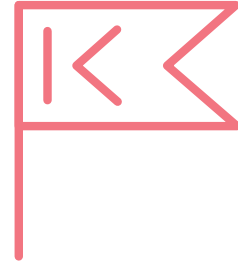
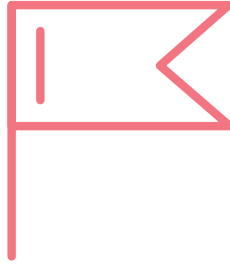
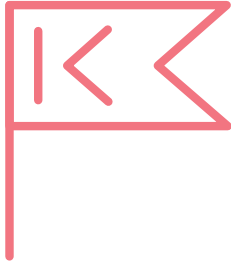




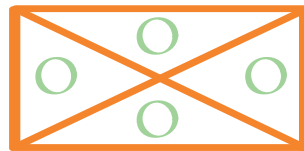
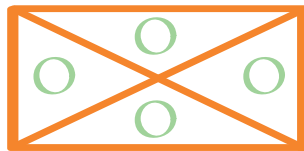

Eksik ayrıntısı aynı olanları bulalım.




a) Üstteki şekil ile aynı olanı göster.





b) Üstteki şekil ile aynı olanı göster.






Eksik ayrıntısı aynı olanları bulalım.



c) Üstteki şekil ile aynı olanı göster.




c) Üstteki şekil ile aynı olanı göster.










Aynı yönde olanları bulalım.



a) Üstteki şekil ile aynı olanı göster.



b) Üstteki şekil ile aynı olanı göster.



Aynı yönde olanları bulalım.



c) Üstteki şekil ile aynı olanı göster.

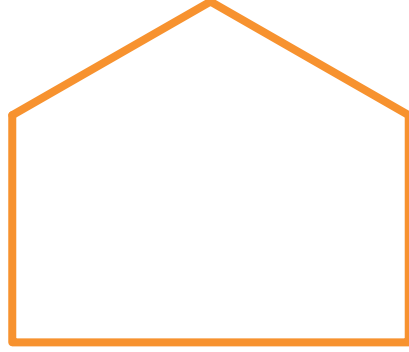


c) Üstteki şekil ile aynı olanı göster.





Aynı yönde olanları bulalım.




a) Üstteki şekil ile aynı olanı göster.



b) Üstteki şekil ile aynı olanı göster.




Aynı yönde olanları bulalım.



c) Üstteki şekil ile aynı olanı göster.



ç) Üstteki şekil ile aynı olanı göster.






Aynı yönde olanları bulalım.



a) Üstteki şekil ile aynı olanı göster.




b) Üstteki şekil ile aynı olanı göster.




Aynı yönde olanları bulalım.



c) Üstteki şekil ile aynı olanı göster.




c) Üstteki şekil ile aynı olanı göster.


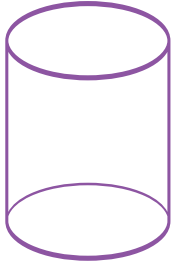







Aynı yönde olanları bulalım.



a) Üstteki şekil ile aynı olanı göster.




b) Üstteki şekil ile aynı olanı göster.



Aynı yönde olanları bulalım.



c) Üstteki şekil ile aynı olanı göster.



ç) Üstteki şekil ile aynı olanı göster.






Ayrıntısı aynı yönde olanları bulalım.




a) Üstteki şekil ile aynı olanı göster.




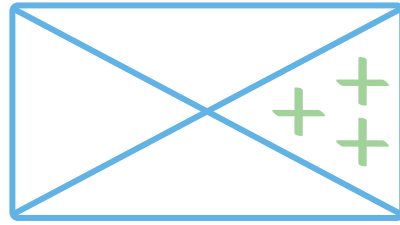
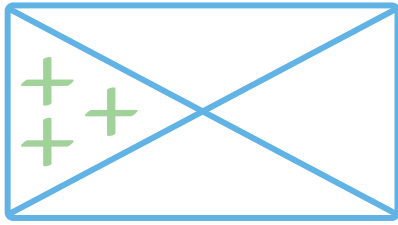
b) Üstteki şekil ile aynı olanı göster.




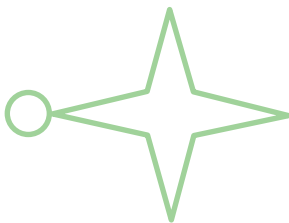
Ayrıntısı aynı yönde olanları bulalım.



c) Üstteki şekil ile aynı olanı göster.

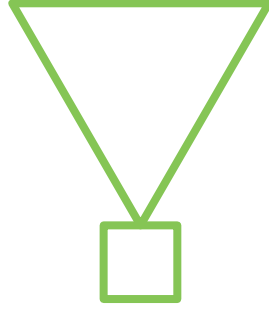


c) Üstteki şekil ile aynı olanı göster.

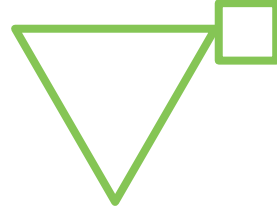





Ayrıntısı aynı yönde olanları bulalım.



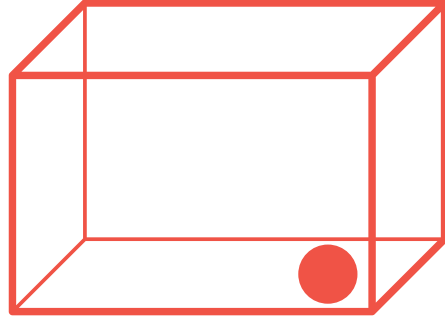
a) Üstteki şekil ile aynı olanı göster.




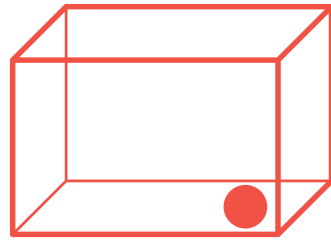
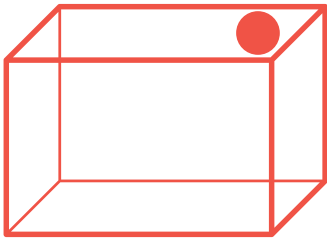
b) Üstteki şekil ile aynı olanı göster.





Ayrıntısı aynı yönde olanları bulalım.



c) Üstteki şekil ile aynı olanı göster.



c) Üstteki şekil ile aynı olanı göster.

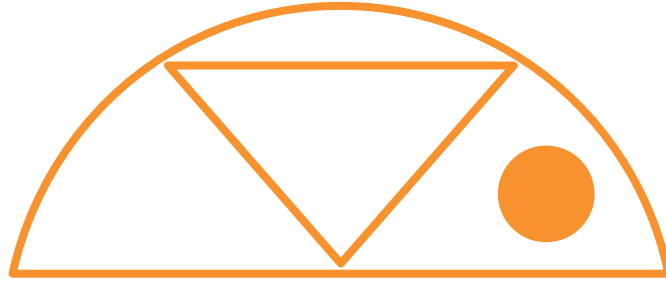




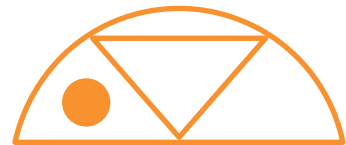

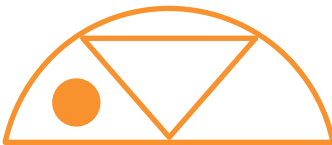
Ayrıntısı aynı yönde olanları bulalım.



a) Üstteki şekil ile aynı olanı göster.



b) Üstteki şekil ile aynı olanı göster.



Ayrıntısı aynı yönde olanları bulalım.



c) Üstteki şekil ile aynı olanı göster.



ç) Üstteki şekil ile aynı olanı göster.






Ayrıntısı aynı yönde olanları bulalım.




a) Üstteki şekil ile aynı olanı göster.



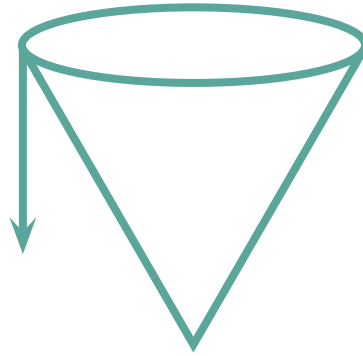
b) Üstteki şekil ile aynı olanı göster.



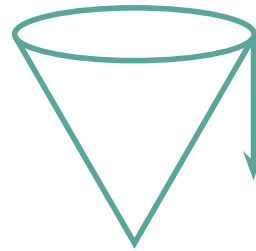
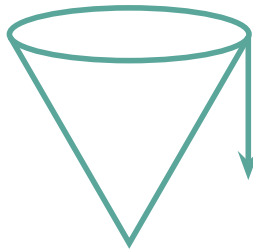
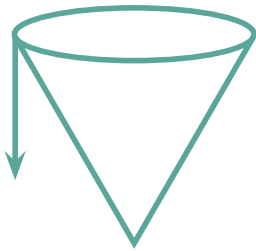
Ayrıntısı aynı yönde olanları bulalım.



c) Üstteki şekil ile aynı olanı göster.



c) Üstteki şekil ile aynı olanı göster.



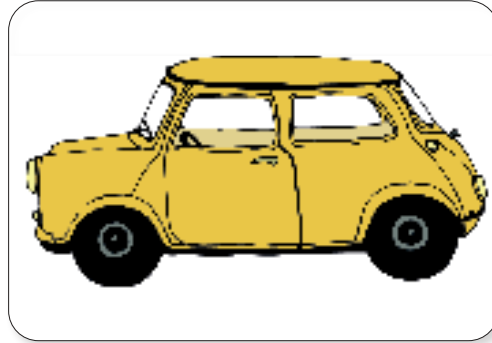


## Resimlerin gölgelerini bulalım.

1. Renkli resme bak. Resmin gölgesini göster.




2. Renkli resme bak. Resmin gölgesini göster.



## Resimlerin gölgelerini bulalım.



3. Renkli resme bak. Resmin gölgesini göster.



4. Renkli resme bak. Resmin gölgesini göster.





## Resimlerin gölgelerini bulalım.

1. Renkli resme bak. Resmin gölgesini göster.



2. Renkli resme bak. Resmin gölgesini göster.



## Resimlerin gölgelerini bulalım.



3. Renkli resme bak. Resmin gölgesini göster.



4. Renkli resme bak. Resmin gölgesini göster.





## Resimlerin gölgelerini bulalım.

1. Renkli resme bak. Resmin gölgesini göster.



2. Renkli resme bak. Resmin gölgesini göster.




## Resimlerin gölgelerini bulalım.



3. Renkli resme bak. Resmin gölgesini göster.




4. Renkli resme bak. Resmin gölgesini göster.





## Resimlerin gölgelerini bulalım.

1. Renkli resme bak. Resmin gölgesini göster.



2. Renkli resme bak. Resmin gölgesini göster.



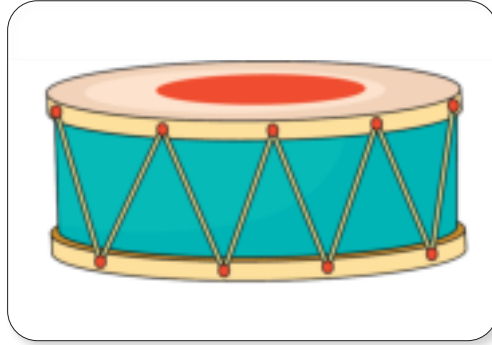
## Resimlerin gölgelerini bulalım.



3. Renkli resme bak. Resmin gölgesini göster.




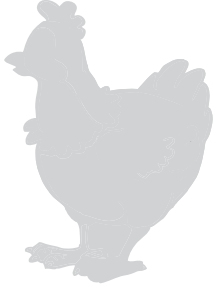

4. Renkli resme bak. Resmin gölgesini göster.





## Resimlerin gölgelerini eşleyelim.





Renkli resimlere bak. Gölgeleleriyle eşle.



## Resimlerin gölgelerini eşleyelim.






Renkli resimlere bak. Gölgeleleriyle eşle.





## Resimlerin gölgelerini eşleyelim.

Renkli resimlere bak. Gölgeleleriyle eşle.



## Resimlerin gölgelerini eşleyelim.



Renkli resimlere bak. Gölgeleleriyle eşle.





## Resimlerin gölgelerini eşleyelim.

Renkli resimlere bak. Gölgeleleriyle eşle.



## Resimlerin gölgelerini eşleyelim.



Renkli resimlere bak. Gölgeleleriyle eşle.





## Resimlerin gölgelerini eşleyelim.

Renkli resimlere bak. Gölgeleleriyle eşle.



## Resimlerin gölgelerini eşleyelim.




Renkli resimlere bak. Gölgeleleriyle eşle.





## Farklı olanı bulalım.

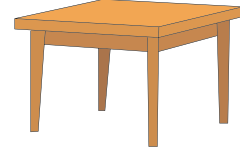


Resimlere bak. Her satırdaki farklı olanı göster.



## Farklı olanı bulalım.











Resimlere bak. Her satırdaki farklı olanı göster.





## Farklı olanı bulalım.



Resimlere bak. Her satırdaki farklı olanı göster.



## Farklı olanı bulalım.




Resimlere bak. Her satırdaki farklı olanı göster.






## Farklı olanı bulalım.

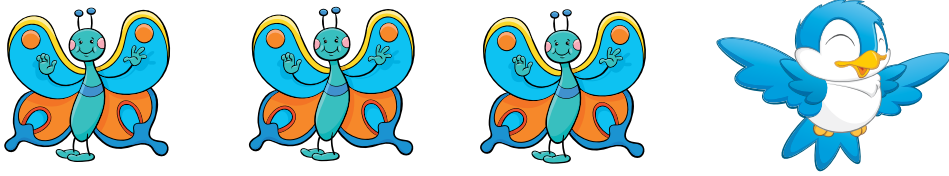
Resimlere bak. Her satırdaki farklı olanı göster.




---



---




---



## Farklı olanı bulalım.





Resimlere bak. Her satırdaki farklı olanı göster.





## Farklı olanı bulalım.


Resimlere bak. Her satırdaki farklı olanı göster.



## Farklı olanı bulalım.




Resimlere bak. Her satırdaki farklı olanı göster.




---



---




---





## Farklı olanı bulalım.




Resimlere bak. Her satırdaki farklı olanı göster.



## Farklı renkte olanları bulalım.



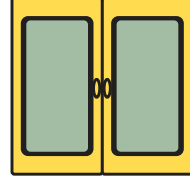
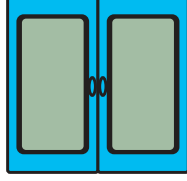
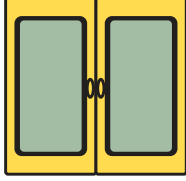
Resimlere bak. Her satırdaki farklı olanı göster.






## Farklı renkte olanları bulalım.




Resimlere bak. Her satırdaki farklı olanı göster.






---



---






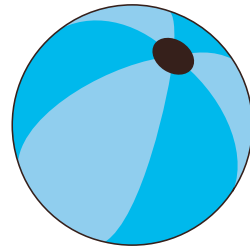
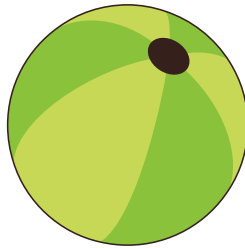
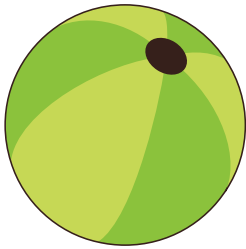



---



## Farklı renkte olanları bulalım.



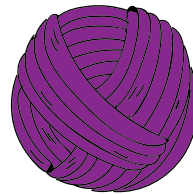
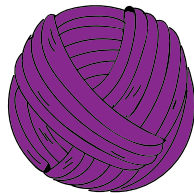
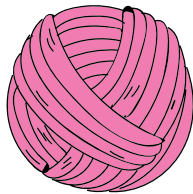

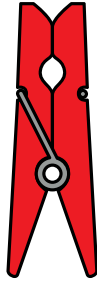
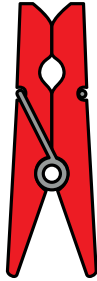

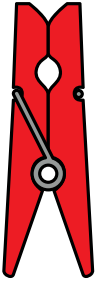
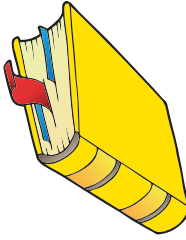
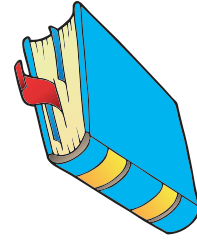
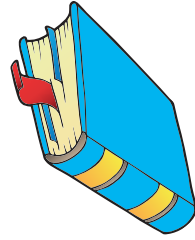

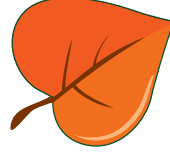
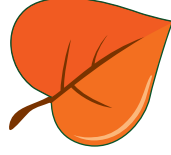
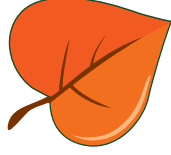

Resimlere bak. Her satırdaki farklı olanı göster.





## Farklı renkte olanları bulalım.

Resimlere bak. Her satırdaki farklı olanı göster.




## Farklı renkte olanları bulalım.



Resimlere bak. Her satırdaki farklı olanı göster.




---



---



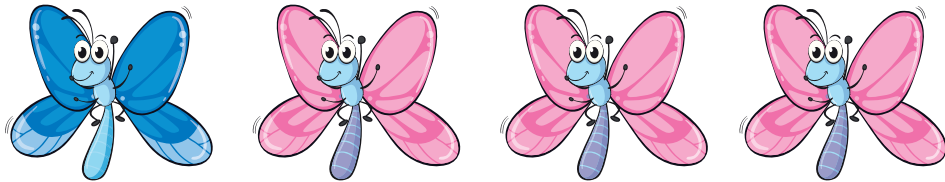



---





## Farklı renkte olanları bulalım.



Resimlere bak. Her satırdaki farklı olanı göster.



## Farklı renkte olanları bulalım.




Resimlere bak. Her satırdaki farklı olanı göster.





## Farklı renkte olanları bulalım.


Resimlere bak. Her satırdaki farklı olanı göster.



## Farklı renkte olanları bulalım.




Resimlere bak. Her satırdaki farklı olanı göster.



---



---






---





## Farklı büyüklükte olanı bulalım.



Resimlere bak. Her satırdaki farklı olanı göster.



## Farklı büyüklükte olanı bulalım.



Resimlere bak. Her satırdaki farklı olanı göster.





## Farklı büyüklükte olanı bulalım.



Resimlere bak. Her satırdaki farklı olanı göster.




---



---




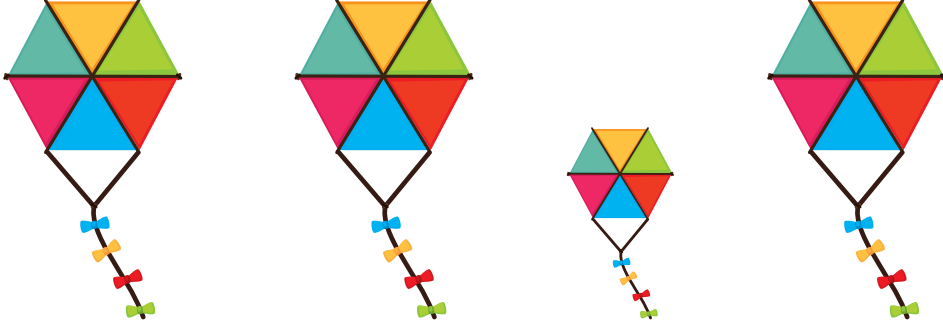
---



## Farklı büyüklükte olanı bulalım.




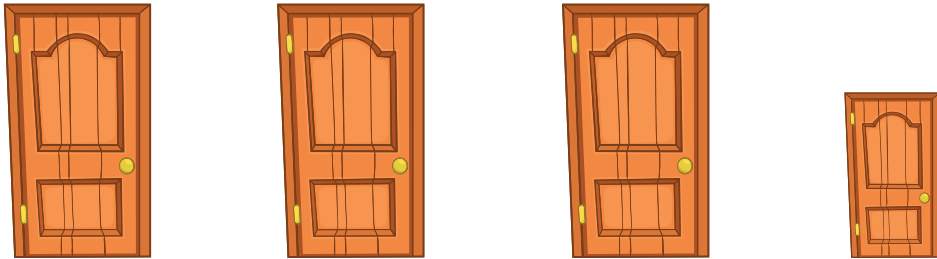

Resimlere bak. Her satırdaki farklı olanı göster.





## Farklı büyüklükte olanı bulalım.


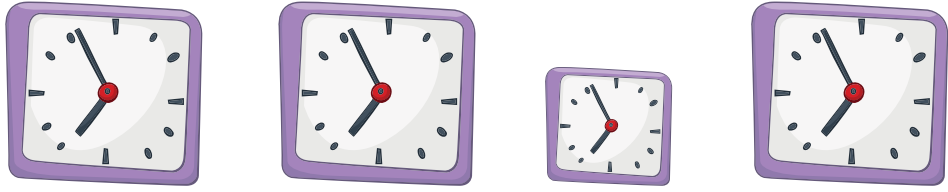

Resimlere bak. Her satırdaki farklı olanı göster.



## Farklı büyüklükte olanı bulalım.




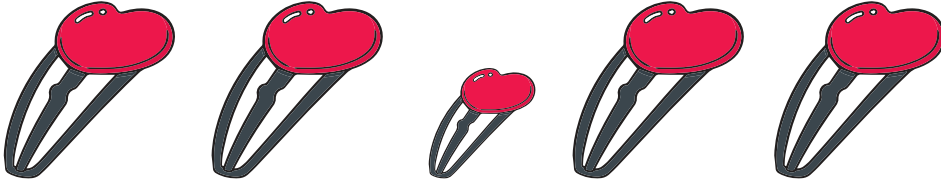

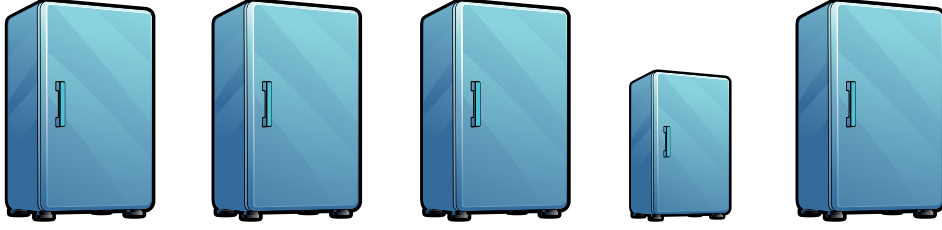
Resimlere bak. Her satırdaki farklı olanı göster.





## Farklı büyüklükte olanı bulalım.


Resimlere bak. Her satırdaki farklı olanı göster.




## Farklı büyüklükte olanı bulalım.



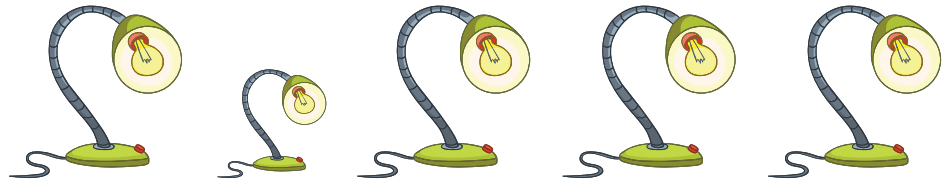
Resimlere bak. Her satırdaki farklı olanı göster.



---



---



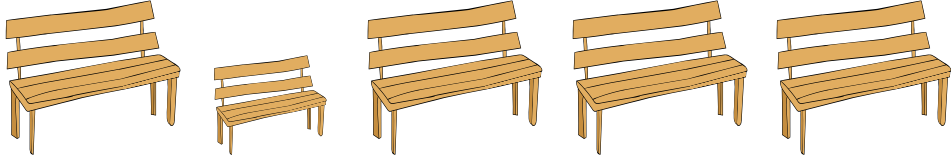
---






## Farklı büyüklükte olanı bulalım.

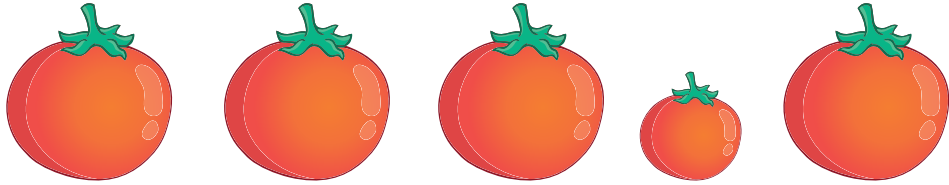
Resimlere bak. Her satırdaki farklı olanı göster.




---



---






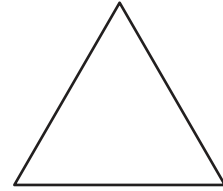
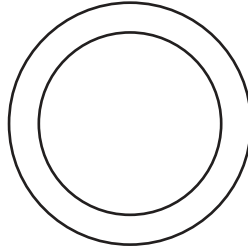
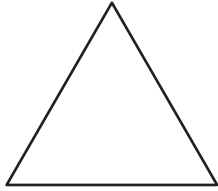
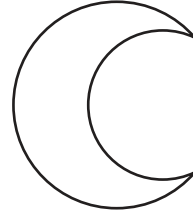
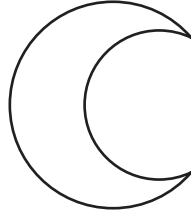

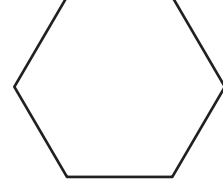

---



## Farklı olan şekli bulalım.




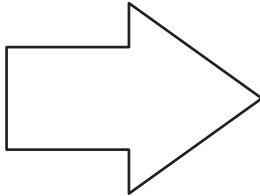

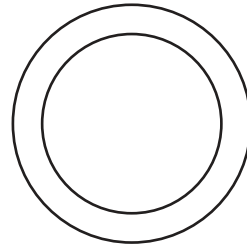
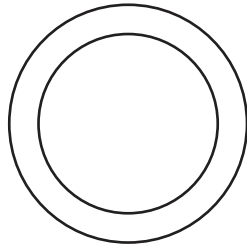
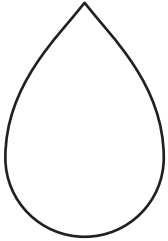






Şekillere bak. Her satırdaki farklı olanı göster.





## Farklı olan şekli bulalım.

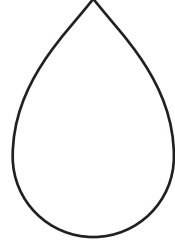


Şekillere bak. Her satırdaki farklı olanı göster.



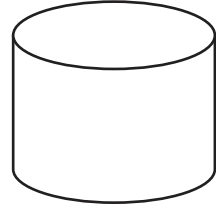
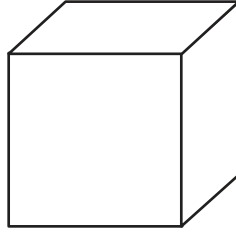
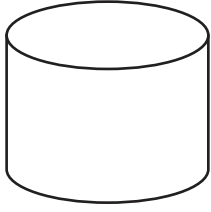
## Farklı olan şekli bulalım.



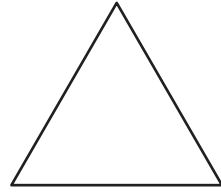
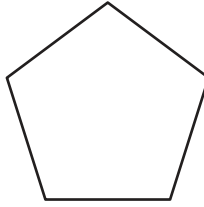
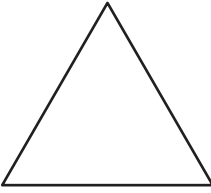
Şekillere bak. Her satırdaki farklı olanı göster.




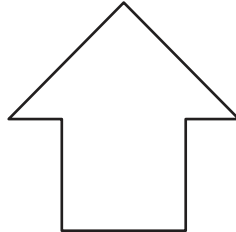

---



---



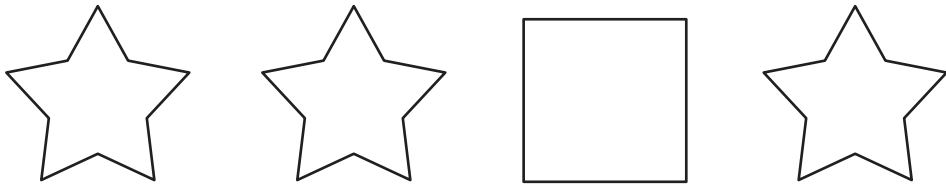
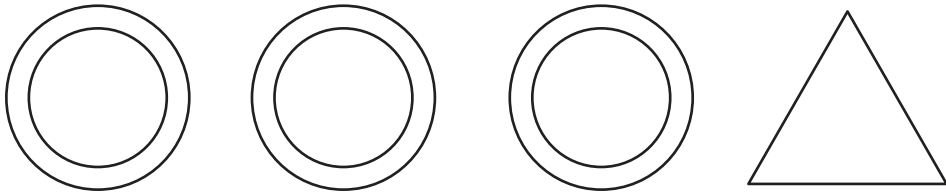
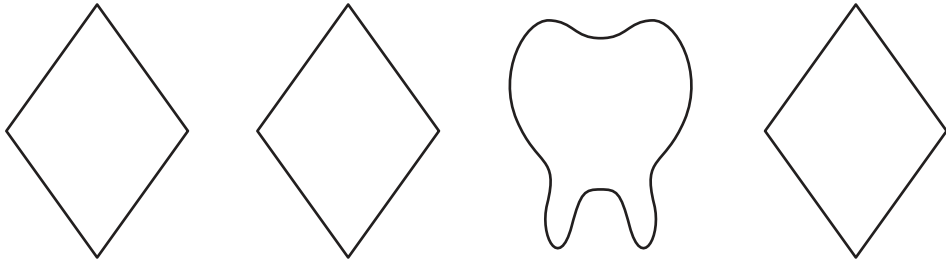
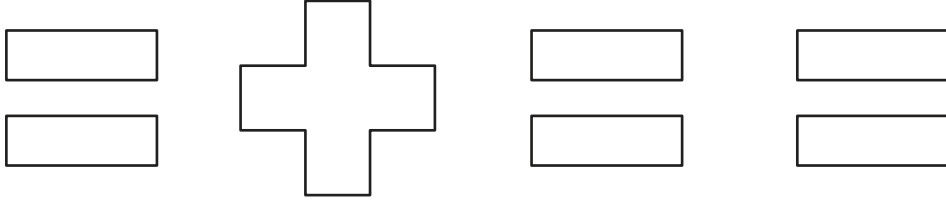
---





## Farklı olan şekli bulalım.

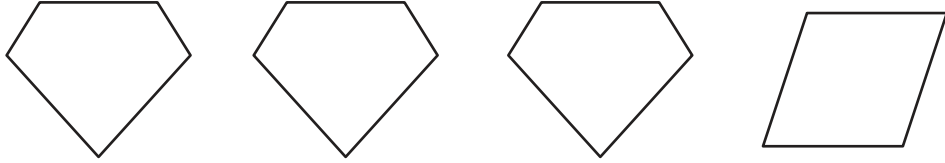
Şekillere bak. Her satırdaki farklı olanı göster.



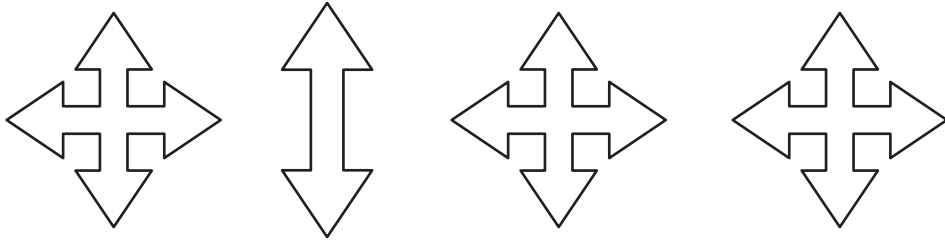
## Farklı olan şekli bulalım.



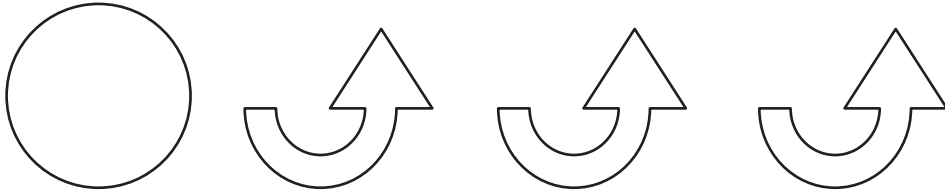
Şekillere bak. Her satırdaki farklı olanı göster.




---



---



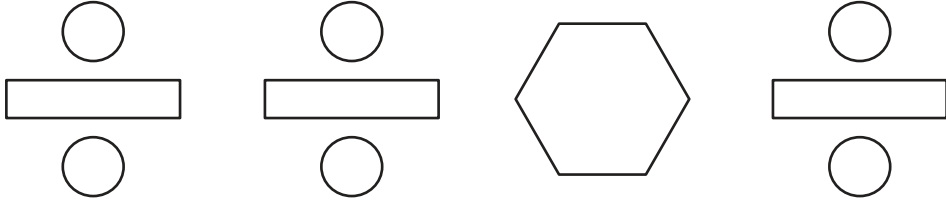
---



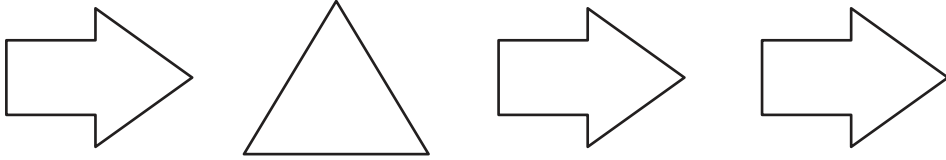


## Farklı olan şekli bulalım.

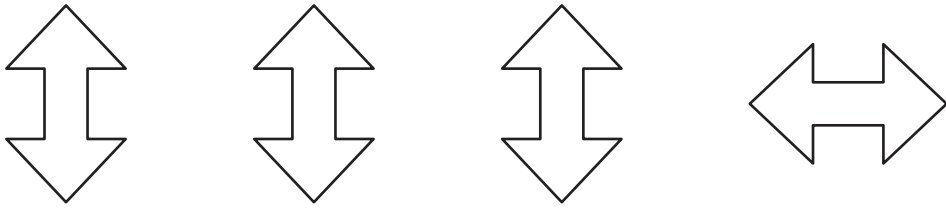
Şekillere bak. Her satırdaki farklı olanı göster.



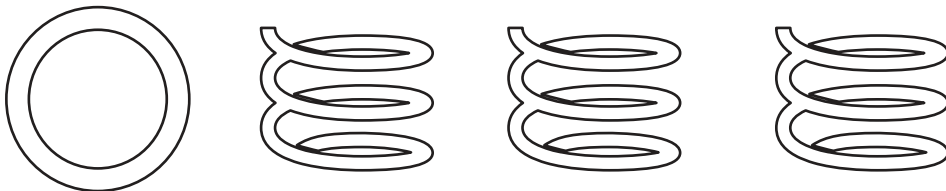
---



---













---



## Farklı renkte olan şekli bulalım.











Şekillere bak. Her satırdaki farklı olanı göster.





## Farklı renkte olan şekli bulalım.

Şekillere bak. Her satırdaki farklı olanı göster.




## Farklı renkte olan şekli bulalım.






Şekillere bak. Her satırdaki farklı olanı göster.



---



---




---






## Farklı renkte olan şekli bulalım.

Şekillere bak. Her satırdaki farklı olanı göster.



---



---



---



## Farklı renkte olan şekli bulalım.




Şekillere bak. Her satırdaki farklı olanı göster.



---



---




---





## Farklı renkte olan şekli bulalım.


Şekillere bak. Her satırdaki farklı olanı göster.




---



---




---




## Farklı büyüklükte olan şekli bulalım.




Şekillere bak. Her satırdaki farklı olanı göster.




---



---







---





## Farklı büyüklükte olan şekli bulalım.




Şekillere bak. Her satırdaki farklı olanı göster.



## Farklı büyüklükte olan şekli bulalım.




Şekillere bak. Her satırdaki farklı olanı göster.





## Farklı büyüklükte olan şekli bulalım.


Şekillere bak. Her satırdaki farklı olanı göster.



---



---



---



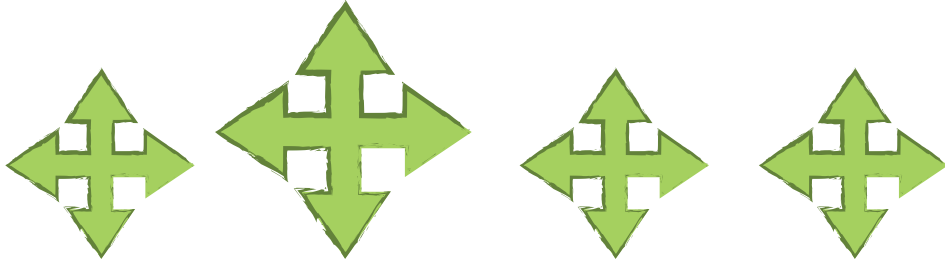
## Farklı büyüklükte olan şekli bulalım.



Şekillere bak. Her satırdaki farklı olanı göster.



---



---





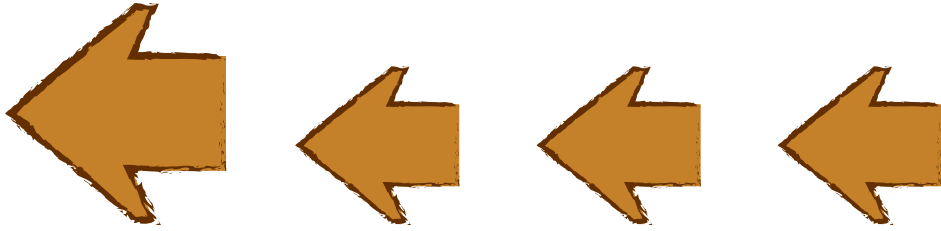
---





## Farklı büyüklükte olan şekli bulalım.





Şekillere bak. Her satırdaki farklı olanı göster.



## Farklı yönde olanı bulalım.




Resimlere bak. Her satırdaki farklı olanı göster.







## Farklı yönde olanı bulalım.


Resimlere bak. Her satırdaki farklı olanı göster.





---



---








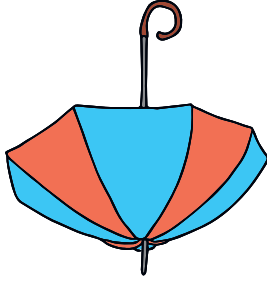
---



## Farklı yönde olanı bulalım.




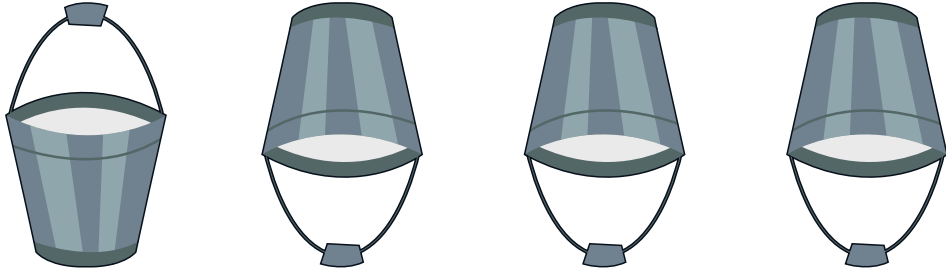

Resimlere bak. Her satırdaki farklı olanı göster.





## Farklı yönde olanı bulalım.


Resimlere bak. Her satırdaki farklı olanı göster.



## Farklı yönde olanı bulalım.





Resimlere bak. Her satırdaki farklı olanı göster.





## Farklı yönde olanı bulalım.


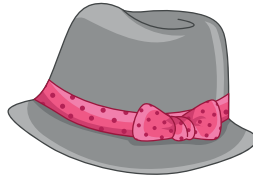


Resimlere bak. Her satırdaki farklı olanı göster.



## Ayrıntısı farklı olanı bulalım.





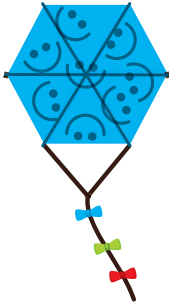

Resimlere bak. Her satırdaki farklı olanı göster.





## Ayrıntısı farklı olanı bulalım.

Resimlere bak. Her satırdaki farklı olanı göster.



## Ayrıntısı farklı olanı bulalım.



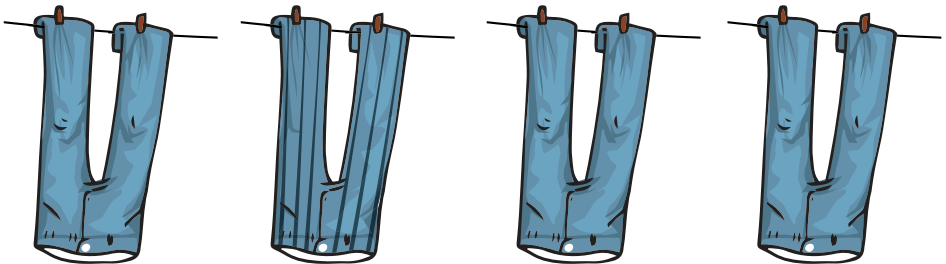
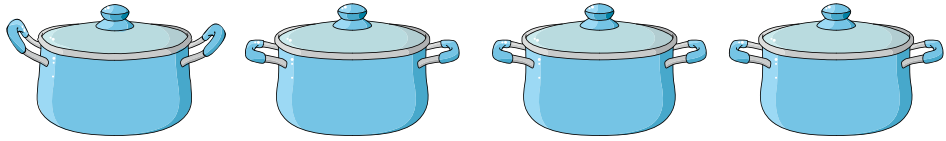
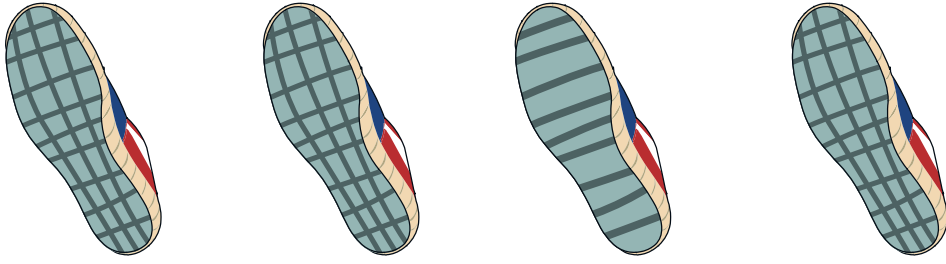
Resimlere bak. Her satırdaki farklı olanı göster.





## Ayrıntısı farklı olanı bulalım.



Resimlere bak. Her satırdaki farklı olanı göster.



## Ayrıntısı farklı olanı bulalım.



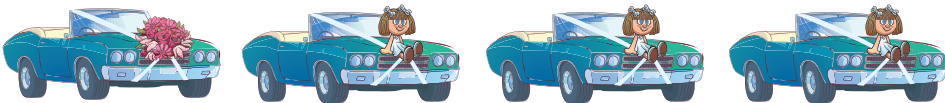

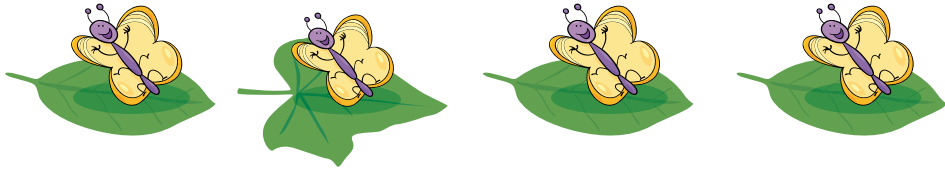

Resimlere bak. Her satırdaki farklı olanı göster.





## Ayrıntısı farklı olanı bulalım.





Resimlere bak. Her satırdaki farklı olanı göster.



## Ayrıntısı eksik olanı bulalım.






Resimlere bak. Her satırdaki farklı olanı göster.





## Ayrıntısı eksik olanı bulalım.





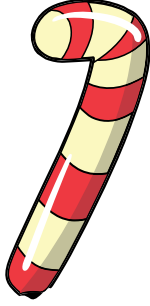
Resimlere bak. Her satırdaki farklı olanı göster.



## Ayrıntısı eksik olanı bulalım.






Resimlere bak. Her satırdaki farklı olanı göster.





## Ayrıntısı eksik olanı bulalım.





Resimlere bak. Her satırdaki farklı olanı göster.



## Ayrıntısı eksik olanı bulalım.



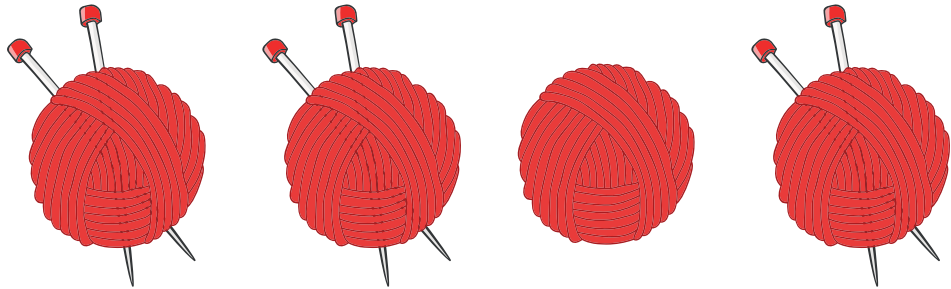


Resimlere bak. Her satırdaki farklı olanı göster.





## Ayrıntısı eksik olanı bulalım.

Resimlere bak. Her satırdaki farklı olanı göster.




## Ayrıntısı farklı yönde olanı bulalım.



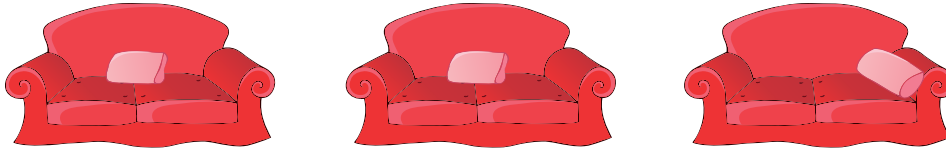
Resimlere bak. Her satırdaki farklı olanı göster.



---



---





---





## Ayrıntısı farklı yönde olanı bulalım.




Resimlere bak. Her satırdaki farklı olanı göster.



## Ayrıntısı farklı yönde olanı bulalım.





Resimlere bak. Her satırdaki farklı olanı göster.





## Ayrıntısı farklı yönde olanı bulalım.





Resimlere bak. Her satırdaki farklı olanı göster.



## Ayrıntısı farklı yönde olanı bulalım.




Resimlere bak. Her satırdaki farklı olanı göster.





## Ayrıntısı farklı yönde olanı bulalım.




Resimlere bak. Her satırdaki farklı olanı göster.



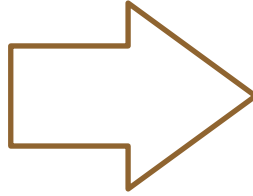
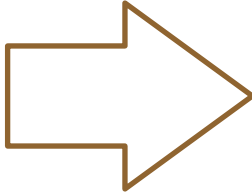
## Farklı yönde olan şekli bulalım.






Bu şekillere bak. Farklı olanı göster.






---



---








---





## Farklı yönde olan şekli bulalım.

Bu şekillere bak. Farklı olanı göster.






## Ayrıntısı farklı olan şekli bulalım.



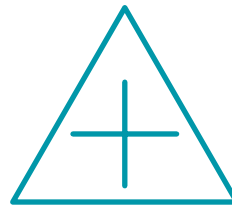
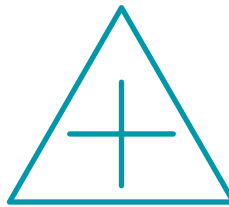

Bu şekillere bak. Farklı olanı göster.






---



---






---





## Ayrıntısı farklı olan şekli bulalım.

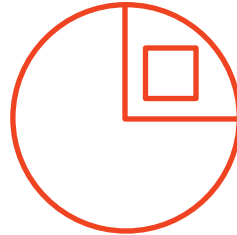
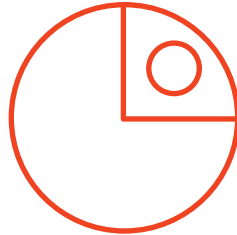
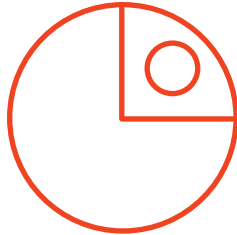
Bu şekillere bak. Farklı olanı göster.



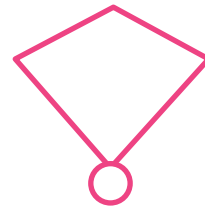
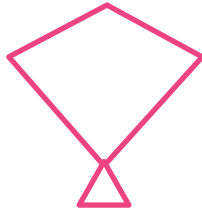
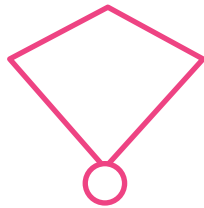
---



---



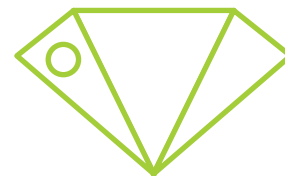

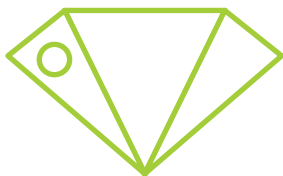
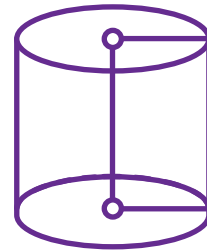

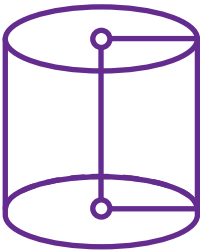
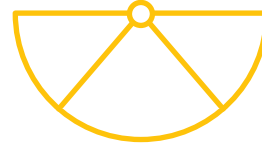



---



## Ayrıntısı eksik olan şekli bulalım.




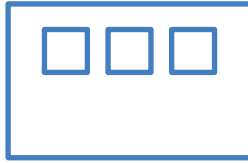
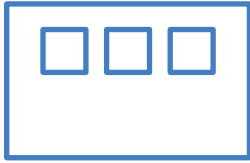

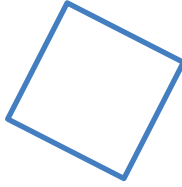


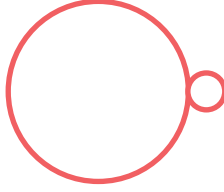

Bu şekillere bak. Farklı olanı göster.





## Ayrıntısı eksik olan şekli bulalım.










Bu şekillere bak. Farklı olanı göster.



Ayrıntısı farklı yönde olan şekli bulalım.




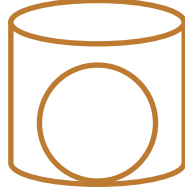

Bu şekillere bak. Farklı olanı göster.








## Ayrıntısı farklı yönde olan şekli bulalım.



Bu şekillere bak. Farklı olanı göster.






---



---



---



## Kaynakça



- Doğanay-Bilgi, A. (2016). *Zihinsel Engellilere Okuma Yazma Öncesi Becerilerin Kazandırılması Ders Notları*. Ankara: Gazi Üniversitesi.
- Özmen, E. R. (2011). *Zihinsel Engellilere Okuma Yazma Öncesi Becerilerin Kazandırılması Ders Notları*. Ankara: Gazi Üniversitesi.
- Lane, K. A. (2012). *Visual Attention in Children: Theories and Activities*. USA: Slack Incorporated.
- Levy, A. & Levy K. W. (2012). *Visual Perception and Drawing*. USA: Scholastic Inc.
- Millî Eğitim Bakanlığı (2018). *Orta-Ağır Zihinsel Engeli ve Otizm Spektrum Bozukluğu Olan Öğrenciler İçin Okuma-Yazma Dersi Öğretim Programı I. Kademe*. Ankara: Millî Eğitim Bakanlığı Yayınları.

## Görsel Kaynakça

Aşağıda numarası belirtilen görseller [www.shutterstock.com](http://www.shutterstock.com) sitesinden 17.01.2019 tarihinde telifi ödenerek alınmıştır.

sayfa 41	256530460	sayfa 50	411225466	sayfa 64	648852823
sayfa 48	146358872	sayfa 57	227704330	sayfa 70	121584694
sayfa 49	257400778	sayfa 58	671838769	sayfa 102	166725800
sayfa 49	396035767	sayfa 61	765271858	sayfa 120	458485348

Fotoğraflar ve vektörel görseller yayınevi arşivinden kullanılmıştır. Çizilen resimler firma ressamı tarafından bu kitap için özel olarak çizilmiştir.



# Bu kitaba sığmayan daha neler var!



Karekodu okutun, bu kitapla ilgili EBA içeriklerine ulaşın!



Kişiselleştirilmiş  
Öğrenme ve  
Raporlama

Animasyonlar,  
3B Modeller,  
Simülasyon ve Oyunlar

Paylaşım ve  
İşbirliği

Ortak / Özel  
Takvim

**eba**  
www.eba.gov.tr



**BU DERS KİTABI MİLLÎ EĞİTİM BAKANLIĞINCA  
ÜCRETSİZ OLARAK VERİLMİŞTİR.  
PARA İLE SATILAMAZ.**

*Bandrol Uygulamasına İlişkin Usul ve Esaslar Hakkında Yönetmeliğin Beşinci Maddesinin İkinci Fıkrası Çerçevesinde Bandrol Taşınması Zorunlu Değildir.*